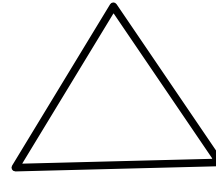

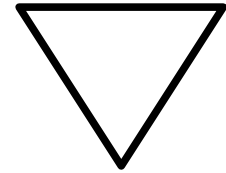
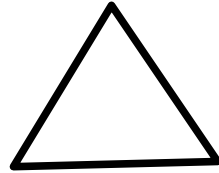



NOMBRE: \_\_\_\_\_ FECHA: \_\_\_\_\_

CUENTA CUÁNTOS TRIÁNGULOS HAY Y RODEA EL NÚMERO CORRESPONDIENTE



3

2

5